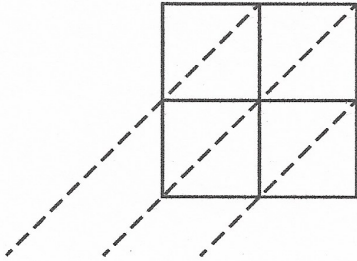


Name: \_\_\_\_\_

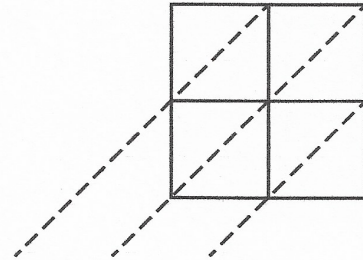
# Lattice Multiplication

c. Find  $24 \times 56$ .



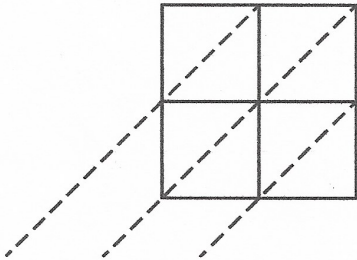
Answer: \_\_\_\_\_

d. Find  $53 \times 29$ .



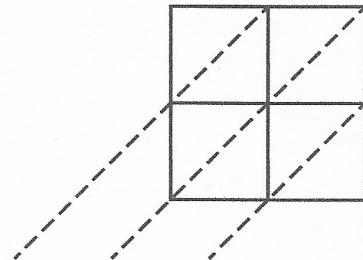
Answer: \_\_\_\_\_

e. Find  $71 \times 80$ .



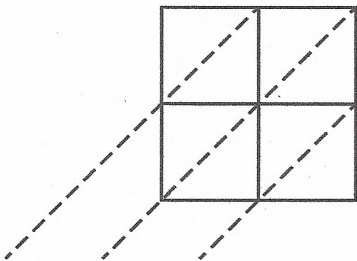
Answer: \_\_\_\_\_

f. Find  $83 \times 27$ .



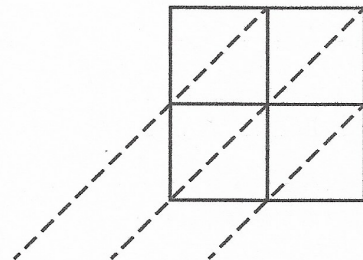
Answer: \_\_\_\_\_

g. Find  $13 \times 83$ .



Answer: \_\_\_\_\_

h. Find  $41 \times 46$ .



Answer: \_\_\_\_\_