




# Mario's Coffee Shop

Mario runs a small coffee shop. Every day he serves breakfast and lunch. It is important for Mario to know about time and measuring things.

- The clocks show the times that Mario opened his coffee shop, served lunches, and closed his coffee shop one day this week.
  - Write the times using A.M. and P.M.

Morning	Lunch	Afternoon
 _____	 _____	 _____

- Ms. Henley is meeting her son at the coffee shop at 12:00 for lunch. She arrives 20 minutes early. What time does Ms. Henley get to the coffee shop? Use A.M. or P.M. Explain how you know which one to use.

---



---



---

- Mario puts loaves of bread in the oven at 8:20 A.M. He takes the bread out at 8:47 A.M. Find how long it took for the bread to bake. Use the number line to solve the problem (or make a t-chart).

