

# Good Morning, Sunshine!

**Week 5  
Math**


Name \_\_\_\_\_ Week of \_\_\_\_\_

## Multiplication Monday

Date: \_\_\_\_\_

I know... Life is hard on Monday, but it's time to awaken your brain! Let's start the day by saying hello to your neighbor! Everybody needs a warm greeting on Monday!


Mark planted 36 seeds in 6 rows. How many seeds are in each row?



### True or False?


$$(64 \div 8) + 4 = 13$$

Write a multiplication equation for the number of dragonflies below.



### DAILY UPDATE:

Who's the funniest person you know?




## Base Ten Tuesday

Date: \_\_\_\_\_

Yay! You came back to school today! Give yourself a pat on the back simply for being here. 😊

### FUN FACT!

Flamingos are pink in color because of the shrimp they eat. A flamingo consumed 675 grams of shrimp over 2 days. If the flamingo consumed 325 grams on the first day, how many grams of shrimps did it consume on the second day?



An incomplete table is shown. Complete the table by filling in the missing original numbers with possible values.

Original Number	Rounded to Nearest Ten
	530
	550
	580

### DAILY UPDATE:

What time did you go to bed last night?

What time did you get up this morning?

How many hours of sleep did you get?

