

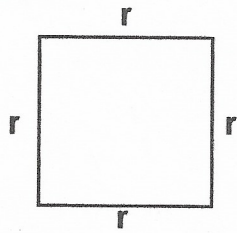
Wordless Wednesday



Date: _____

Guess what day it is?...Wordless Wednesday! No WORD Problems for you!

Perimeter = 12 feet




r = _____

$$5 \times s = 15$$


s = _____

Area = _____



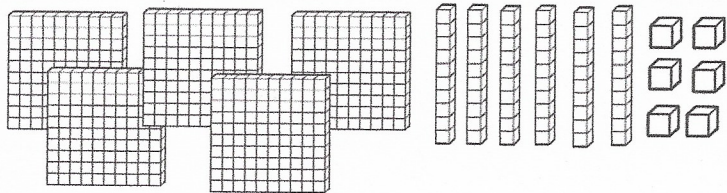
DAILY UPDATE: Describe your mood today with ONE feeling word _____

Throwback Thursday



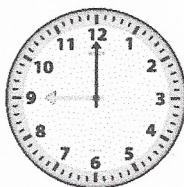
Date: _____

It's Throwback Thursday! Let's review...




How much is shown?

What time does the clock say?



What time will it be in 2 hours and 25 minutes?

How many lines of symmetry does this shape have? _____




What names can you give this shape?

The Florida Manatee is a lovable mammal! The beautiful sea cow consumes only plants.

Circle the adjectives.
Underline the nouns.

Fraction Fun Friday



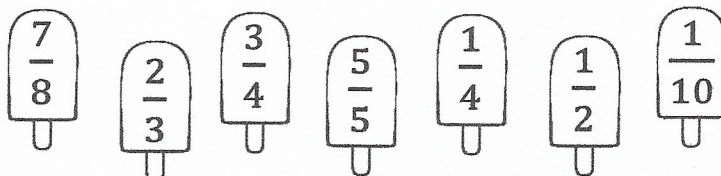
Date: _____

We made it! Let's celebrate by having some fun with fractions!

Emily jogged along a stretch of the beach that was $\frac{1}{4}$ of a mile long. She did this 4 times. How many miles did Emily jog in all?



Shade in three popsicles below that contain the three greatest fractions.



WEEKLY UPDATE

What's your current favorite song?