


Name \_\_\_\_\_


## Look at My Angle!

Read the description. Then draw the closed shape. If the shape cannot be drawn, write *impossible*.


1. a shape that has 6 sides and 3 right angles




2. a triangle with 2 right angles




3. a shape that has 4 sides and 3 angles less than a right angle




4. a shape that has 4 sides and 2 angles greater than a right angle



5. a shape that has 4 sides, 3 right angles, and 1 angle less than a right angle



6. a shape that has 8 sides and 4 right angles



7. **Write Math** Choose a shape from above that cannot be drawn. Explain why the shape cannot be drawn.

---



---



---