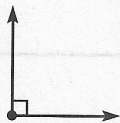


Name _____

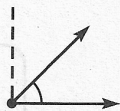
Describe Angles in Plane Shapes

There are different types of angles.

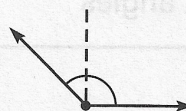
A **right angle** forms a square corner.



Some angles are less than a right angle.



Some angles are greater than a right angle.

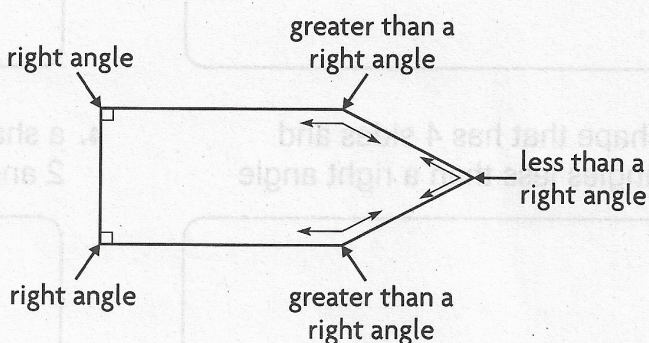


Look at this shape.
Describe the angles.

There are 2 right angles.

There are 2 angles greater than a right angle.

There is 1 angle less than a right angle.

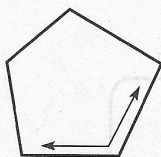


Use the corner of a sheet of paper to tell whether the angle is a **right angle**, **less than a right angle**, or **greater than a right angle**.

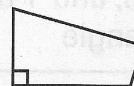
1.



2.




3.

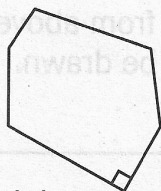


Write how many of each type of angle the shape has.

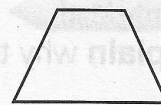
4.



5.



6.



___ right

___ right

___ right

___ less than a right

___ less than a right

___ less than a right

___ greater than a right

___ greater than a right

___ greater than a right