

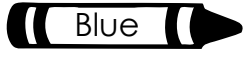







Name: _____

Write the quotient for each division fact. Then, color according to the key at the bottom.

-  Tan 6, 8
-  Grey 0
-  Blue 4
-  Red 5

-  Purple 3
-  Green 1, 9
-  Orange 2
-  Yellow 7

