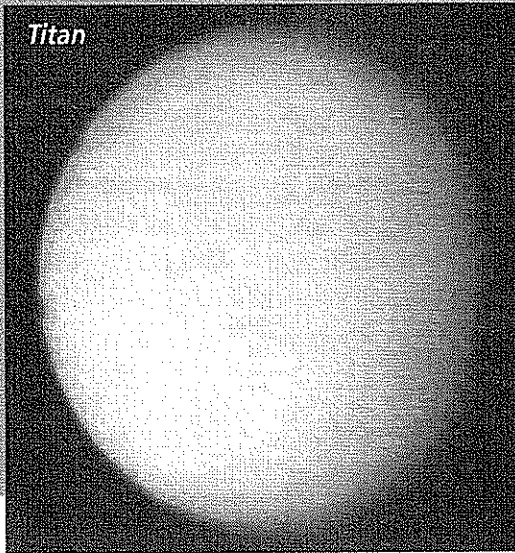



# Satellites of the Gas Giants


Saturn's largest satellite



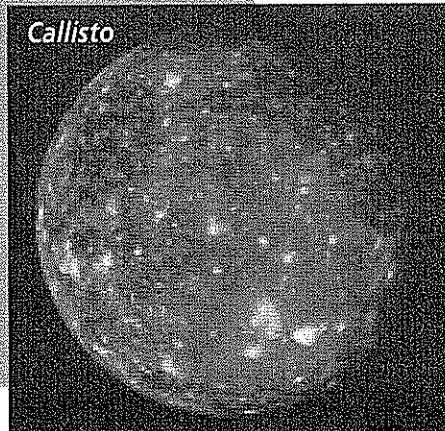


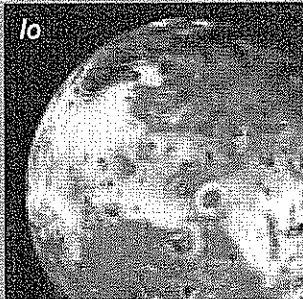
Neptune's largest satellite



Uranus' largest satellite



Jupiter's largest satellites



Copyright © Glencoe/McGraw-Hill, a division of The McGraw-Hill Companies, Inc.

# Satellites of the Gas Giants

1. Name and describe Saturn's largest satellite.

---

---

---

2. How many satellites is Uranus believed to have? Name one.

---

3. Compare and contrast Jupiter's Galilean satellites.

---

---

---

---

---

---

---

---

4. Why are the major satellites of the gas giant planets found farther out than their rings?

---

---

---

---

5. Why might the gas giant planets have more satellites than the terrestrial planets?

---

---

---

6. Describe Neptune's largest moon.

---

---

---