

NAME: _____ DATE: _____

DIRECTIONS

Read the text and then answer the questions.

Glass painting is a special kind of painting. Artists who paint on glass use special paints. Those paints let them create beautiful pictures on the glass. Then, when sunlight comes through the glass, the colors seem to come alive. Some artists do reverse glass painting. They paint their pictures backward, beginning with the finishing touches. Next, they paint the main details. Then, they paint the background. When the painting is finished, it dries. Then, you can see the picture through the other side of the glass. Stained glass is a kind of glass painting, too. Artists who make stained glass use another kind of paint. After the artist applies the paint, the glass is heated to bond the paint to the glass. That is why it is called stained glass.

SCORE

1. (Y) (N)

2. (Y) (N)

3. (Y) (N)

4. (Y) (N)

5. (Y) (N)

___ / 5

Total

1. What does *reverse glass painting* mean?
- (A) to paint on anything except glass
- (B) to paint when it is sunny
- (C) to paint with the opposite hand
- (D) to paint backward, starting with the finishing touches

2. In which chapter of a book on painting would this text most likely be found?
- (A) The Still Life
- (B) Portraits
- (C) Glass Techniques
- (D) Palette Design

3. Which word does not have a long a vowel sound?
- (A) artist
- (B) stained
- (C) painting
- (D) create

4. *Reverse* and *backward* are
- (A) synonyms.
- (B) antonyms.
- (C) rhymes.
- (D) opposites.

5. *The colors seem to come alive* is an example of
- (A) rhyme.
- (B) personification.
- (C) simile.
- (D) fable.

NAME: _____ DATE: _____

DIRECTIONS

Read the text and then answer the questions.

Glass painting is a very old art form. Nobody knows exactly when people began to paint glass. But painted glass figures have been found in the ruins of ancient Rome. Glass painting became very important during the 10th century. At that time, people were building churches, and painted glass was used for the windows. The pictures in the glass windows were used to tell stories. As time went on, people learned new ways to paint glass and made new kinds of paints. So glass painting changed. Today, glass painting artists do not paint just windows. And they do not just tell stories with their pictures. Glass painting is used on all sorts of things, such as dishes, vases, and drinking glasses.

SCORE

1. (Y) (N)

2. (Y) (N)

3. (Y) (N)

4. (Y) (N)

5. (Y) (N)

___ / 5

Total

1. Which is **not** a true statement about glass paintings?

- (A) It became important during the 10th century.
- (B) It is an old art form.
- (C) It can be done on windows, dishes, vases, and glasses.
- (D) It is for glass that is too small to paint.

2. What is the purpose of glass painting on windows in churches?

- (A) to make churches pretty
- (B) to show off new artists
- (C) to hide broken windows
- (D) to tell stories

3. Which is a homophone of *new*?

- (A) fresh
- (B) old
- (C) knew
- (D) kinds

4. *Ancient* is a synonym for

- (A) expensive.
- (B) royal.
- (C) old.
- (D) Western.

5. Which two words describe the tone of the text?

- (A) *argumentative* and *serious*
- (B) *informative* and *silly*
- (C) *informative* and *serious*
- (D) *interesting* and *hurried*

NAME: _____ DATE: _____

DIRECTIONS

Read the text and then answer the questions.

While it's true that glass painting started in Europe, it didn't stay local for long. Glass painting spread to India, China, Africa, and the United States, too. Today, there are glass paintings all over the world. Each place has its own style. Many Indian glass paintings have very bright colors. They may have fancy patterns. Chinese glass paintings use both dark colors and light colors. They may show flowers. They may show birds and other animals. Beautiful African glass paintings show daily life. Some are used to teach lessons. They often use bold, bright colors. What about the United States? There are a lot of beautiful glass paintings in the United States, too!

SCORE

1. (Y) (N)

2. (Y) (N)

3. (Y) (N)

4. (Y) (N)

5. (Y) (N)

___ / 5

Total

1. After reading the text, a reader would most benefit by looking at examples of stained glass

- (A) from China.
- (B) from India.
- (C) from different cultures.
- (D) from the United States.

2. Which images are not on Chinese glass paintings?

- (A) airplanes
- (B) flowers
- (C) birds
- (D) all of the above

3. Which word has the same vowel sound as the word *style*?

- (A) bright
- (B) African
- (C) stay
- (D) beautiful

4. The root word in *daily* is

- (A) dai.
- (B) dail.
- (C) day.
- (D) ily.

5. What is the author's purpose?

- (A) to inform
- (B) to entertain
- (C) to persuade
- (D) to instruct

NAME: _____ DATE: _____

MAKE YOUR OWN PAINTED GLASS

It's easy to make your own beautiful painted glass picture. Here's what you will need:

- A picture frame
- White glue
- Glass paint and brushes
- Coloring book page or drawing
- Tape or a hot-glue gun

Here is what you'll need to do:

1. Draw a picture, or if you'd prefer, choose a picture from a coloring book.
2. Remove the back of the picture frame.
3. Using tape or a hot-glue gun, secure the glass in the frame from the back.
4. Place the frame facedown over your picture.
5. Using the glass paints and brushes, color in your picture.
6. Squeeze out $\frac{1}{3}$ of the glue and replace it with black paint. Mix them together.
7. Using the original glue container, squeeze paint and glue mixture to line your picture to give it a stained-glass effect.
8. Let your picture dry.
9. Then, replace the back and hang your picture on the wall or attach strings to hang it in a window without the backing.



NAME: _____ DATE: _____

DIRECTIONS

Read "Make Your Own Painted Glass" and then answer the questions.

1. Why do you think you need glass paint for this project?

- (A) Glass paint has brighter colors.
- (B) Other kinds of paint might not work properly on glass.
- (C) Glass paint is easier to find than other kinds of paint.
- (D) Other kinds of paint do not come in as many colors.

2. You might read this if you wanted to

- (A) find out about stained-glass windows.
- (B) learn about African glass art.
- (C) try a glass painting project.
- (D) find out where to buy glass paintings.

3. Which is the first step in making your own painted glass?

- (A) Draw or choose a picture.
- (B) Paint the glass.
- (C) Use tape to secure the glass in the frame.
- (D) Let the picture dry.

4. Adding the stained-glass effect comes after

- (A) coloring in the picture.
- (B) letting the picture dry.
- (C) replacing the back.
- (D) hanging the picture in a window.

5. This would be interesting to people who like

- (A) mathematics.
- (B) science.
- (C) art.
- (D) history.

6. What is a good summary of this text?

- (A) This tells what glass painting is.
- (B) This tells how to squeeze glue.
- (C) This tells where glass painting started.
- (D) This tells how to make your own glass painting.

SCORE

1. (Y) (N)

2. (Y) (N)

3. (Y) (N)

4. (Y) (N)

5. (Y) (N)

6. (Y) (N)

___ / 6

Total

NAME: _____ **DATE:** _____

DIRECTIONS

Reread "Make Your Own Painted Glass." Then, read the prompt and respond on the lines below.

SCORE

___ / 4

Which step would be hardest for you? Which step would be easiest? Why? Explain your answer.

Horizontal lines for writing the response.

NAME: _____ DATE: _____

DIRECTIONS

Read and answer each question.

SCORE

1. (Y) (N)

1. Write the missing punctuation in the sentence.

.....
 If you have a big job to do make a plan.

2. (Y) (N)

2. Circle the word that should be capitalized in the sentence.

.....
 Students at south Street School planned and planted a big garden.

4. (Y) (N)

3. Underline the pronoun in sentence A below.

.....
 4. Circle the verb in sentence A below.

(A) They worked on it in the spring and summer.

6. (Y) (N)

5. Write the correct word for the sentence below.

.....
 _____ were lots of vegetables to harvest in the fall.

(They're, Their, There)

6. Circle the correctly spelled word.

.....
 determined

determinded

deurmined



___ / 6

Total

NAME: _____ **DATE:** _____

DIRECTIONS

Read and answer each question.

1. Write the missing punctuation in the sentence.

If you like beautiful countryside visit Alaska.

1. (Y) (N)

2. Circle the word that should be capitalized in the sentence.

On january 3, 1959, Alaska joined the United States.

2. (Y) (N)

3. Underline the proper nouns in sentence A below.

A Alaska was purchased from Russia.

3. (Y) (N)

4. Circle the prepositional phrase in sentence A below.

A Alaska was purchased from Russia.

4. (Y) (N)

5. Write the correct word for the sentence below.

The _____ can be very cold in the winter!
(weather, whether)

5. (Y) (N)

6. Circle the correctly spelled word.

glaceir
glacer
glacier



6. (Y) (N)

___ / 6
Total

NAME: _____ DATE: _____

DIRECTIONS

Read and answer each question.

SCORE

1. (Y) (N)

1. Write the missing punctuation in the sentence.

.....
 Dr. Seuss wrote many books such as Hop on Pop.

2. (Y) (N)

2. Circle the word that should be capitalized in the sentence.

.....
 His full name was Theodor Seuss geisel.

4. (Y) (N)

3. Underline the plural noun in sentence A below.

.....
 4. Circle the verbs in sentence A below.

.....
 A He wrote and illustrated 44 books.

6. (Y) (N)

5. Write the correct word for the sentence below.

.....
 His books are loved _____ many people around the world.

(buy, by, bye)

6. Circle the correctly spelled word.

rhyme

rhymn

ryhme



___ / 6
 Total

NAME: _____ DATE: _____

DIRECTIONS

Read and answer each question.

1. Write the missing punctuation in the sentence.

On August 21 1959, the 50th state joined the United States.

2. Circle the word that should be capitalized in the sentence.

Made up of islands, Hawaii is in the Pacific ocean.

3. Underline the prepositions in sentence A below.

A The capital is Honolulu on the island of Oahu.

4. Circle the linking verb in sentence A below.

A The capital is Honolulu on the island of Oahu.

5. Write the correct word for the sentence below.

_____ have lots to do if you visit Hawaii.

(Yule, You, You'll)

6. Circle the correctly spelled word.

volcano

volcanoe

vulcano

**SCORE**

1. (Y) (N)

2. (Y) (N)

3. (Y) (N)

4. (Y) (N)

5. (Y) (N)

6. (Y) (N)

___ / 6

Total

NAME: _____ DATE: _____

DIRECTIONS Read and answer each question.

SCORE

1. (Y) (N)

1. Write the missing punctuation in the sentence.

.....
Carson likes to take pictures and Mia likes to make movies.
.....

2. (Y) (N)

2. Circle the word that should be capitalized in the sentence.

.....
Carson found an old kodak camera in his attic.
.....

4. (Y) (N)

3. Underline the prepositional phrase in sentence A below.

.....
.....

5. (Y) (N)

4. Circle the adverb in sentence A below.

.....
A People can easily take pictures with their cell phones.
.....

6. (Y) (N)


5. Write the correct word for the sentence below.

.....
Digital cameras are more _____.
.....
(current, currant)

___ / 6
Total

6. Circle the correctly spelled word.

.....
portraite
portrait
portrate
.....

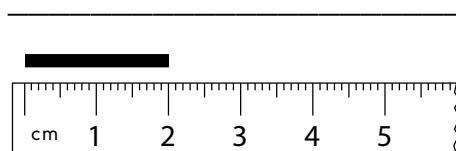


NAME: _____

DIRECTIONS Solve each problem.

1.
$$\begin{array}{r} 29 \\ + 14 \\ \hline \end{array}$$

7. Write the length in millimeters.



2. Write 25% as a fraction.

3. Calculate 71 divided by 10.

4. $24 \div 6 =$ _____

8. 16 pints = _____ gallons

9. How many faces does a square pyramid have?

5. Write 1,414 in expanded notation.

10. Use each of the five numbers once and any operations to solve the problem below.

$$\boxed{10} \quad \boxed{13} \quad \boxed{1} \quad \boxed{4} \quad \boxed{12}$$

$$\boxed{} \quad \boxed{} \quad \boxed{} \quad \boxed{} \quad \boxed{} = 10$$

SCORE

1. (Y) (N)

2. (Y) (N)

3. (Y) (N)

4. (Y) (N)

5. (Y) (N)

6. (Y) (N)

7. (Y) (N)

8. (Y) (N)

9. (Y) (N)

10. (Y) (N)

____ / 10
Total

NAME: _____

DIRECTIONS Solve each problem.

SCORE

1. (Y) (N)

1.
$$\begin{array}{r} 26 \\ - 13 \\ \hline \end{array}$$

2. (Y) (N)

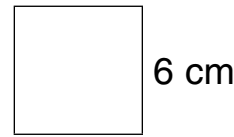
6. $3 \times 3 = \frac{1}{3}$ of

3. (Y) (N)

2. Write $\frac{73}{100}$ as a percentage.

7. Calculate the perimeter of a square with 6-cm sides.

4. (Y) (N)



5. (Y) (N)

3. $95 \div 5 =$ _____

8. 2 yards = _____ inches

6. (Y) (N)

7. (Y) (N)

8. (Y) (N)

4. Divide 8 into 44.

9. Is a hexagon a plane shape or a solid?

9. (Y) (N)

10. (Y) (N)

5. What is the place value of 2 in 2,647?

10. Mom bakes 24 cookies for the soccer team. One-half of the cookies are eaten. How many are not eaten?

___ / 10

Total

NAME: _____

DIRECTIONS

Solve each problem.

1. Calculate the sum of 25 and 17.

2. Is $\frac{4}{5}$ greater than, less than, or equal to $\frac{4}{50}$?

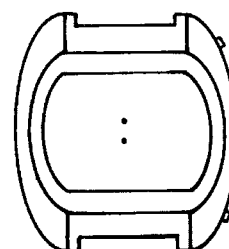

3. $83 \div 6 =$ _____

4. Calculate the quotient of 56 and 7.

5. Write four thousand seven hundred with numerals.

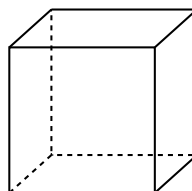
6. $100 \times 1 = 10 \times$

7. Show 7:50 on both clocks.



8. Which months are in the last third of the year?

9. Draw the front view.



10. You are saving for an mp3 player that costs \$75.00. Mom says she will help you by paying for $\frac{1}{3}$ of the cost of the player. How much do you still have to save?

SCORE

1. (Y) (N)

2. (Y) (N)

3. (Y) (N)

4. (Y) (N)

5. (Y) (N)

6. (Y) (N)

7. (Y) (N)

8. (Y) (N)

9. (Y) (N)

10. (Y) (N)

___ / 10

Total

NAME: _____

DIRECTIONS Solve each problem.

SCORE

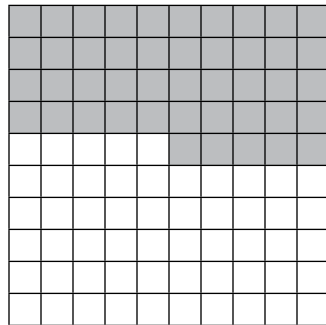
1. (Y) (N)

1. $42 - 8 = \underline{\hspace{2cm}}$

2. (Y) (N)

2. What percent is shaded?

3. (Y) (N)



4. (Y) (N)

5. (Y) (N)

6. (Y) (N)

3. Divide 63 into 7 equal groups.

7. (Y) (N)

8. (Y) (N)

4. $5 \overline{)25}$

9. (Y) (N)

5. What is the number after 4,799?

10. (Y) (N)

6. $\frac{1}{8}$ of 48 is 2 x

7.

An empty wheelbarrow has a mass of 12 kg. How heavy is the load if the full wheelbarrow has a mass of 22 kg?

8.

How many days are in May?

9.

Books Read in March

Cathy			
Martin			
Jose			

= 5 books read

Cathy's goal is to read 10 more books in April than she read in March. What is her new book goal?

10.

Add 4 hundreds, 3 tens, and 0 ones to 362.

___ / 10
Total

NAME: _____

DIRECTIONS

Solve each problem.

1.
$$\begin{array}{r} 38 \\ + 34 \\ \hline \end{array}$$

2. Is 49 a square number?

3. $2 \overline{)14}$

4. $45 \div 9 =$ _____

5. What is the value of the hundreds place in 2,604?

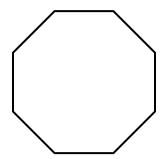
6. Complete the chart to find the cost of 5 pens at 25¢ each.

1 Pen	2 Pens	3 Pens	4 Pens	5 Pens
25¢				

7. How many millimeters are there in 8 centimeters?

8. How many times in a year is the date the 31st?

9. Draw 1 line of symmetry.



10. A pound of ground beef costs \$2.00. You have a coupon for 25% off. How much will you save?

SCORE

- 1. (Y) (N)
- 2. (Y) (N)
- 3. (Y) (N)
- 4. (Y) (N)
- 5. (Y) (N)
- 6. (Y) (N)
- 7. (Y) (N)
- 8. (Y) (N)
- 9. (Y) (N)
- 10. (Y) (N)

___ / 10
Total